

M.S.M.PUBLIC SCHOOL

SITARGANJ

HOLIDAYS HOMEWORK

CLASS-3rd

MATHS

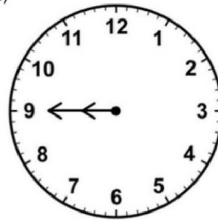
Solve the given worksheet:-

Write the displayed time below each clock:


1)



2)



3)



Multiply a 3 digit number by a 1 digit number.

| | | | | | |
|----|--|----|--|----|--|
| 1) | $\begin{array}{r} 725 \\ \times 5 \\ \hline \end{array}$ | 2) | $\begin{array}{r} 386 \\ \times 3 \\ \hline \end{array}$ | 3) | $\begin{array}{r} 427 \\ \times 9 \\ \hline \end{array}$ |
|----|--|----|--|----|--|

| | | | | | |
|----|--|----|--|----|--|
| 4) | $\begin{array}{r} 614 \\ \times 6 \\ \hline \end{array}$ | 5) | $\begin{array}{r} 782 \\ \times 2 \\ \hline \end{array}$ | 6) | $\begin{array}{r} 891 \\ \times 4 \\ \hline \end{array}$ |
|----|--|----|--|----|--|

Long Division:

| | | | | | | | |
|----|----------------------|----|----------------------|----|----------------------|----|----------------------|
| 1) | $2 \overline{) 734}$ | 2) | $6 \overline{) 258}$ | 3) | $7 \overline{) 147}$ | 4) | $4 \overline{) 620}$ |
| 5) | $8 \overline{) 552}$ | 6) | $4 \overline{) 304}$ | 7) | $3 \overline{) 729}$ | 8) | $6 \overline{) 972}$ |

Give the expanded form of the following:

- 1) $5689 = 5000 + 600 + 80 + 9$
- 2) $3648 =$
- 3) $267 =$
- 4) $1236 =$
- 5) $86 =$

Q. write tables from 2 to 20.

Maths activity draw the following shapes in chart paper.

2D SHAPES



Circle



Semi-Circle



Square



Rectangle



Triangle



Pentagon



Hexagon



Heptagon



Octagon



Nonagon



Decagon

3D SHAPES



Sphere



Cone



Cylinder



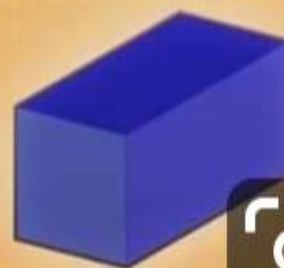
Prism



Pyramid



Cube



Cuboid



HINDI

Complete this worksheet

नाम- रोल नं- कक्षा-तीसरी

विषय- हिंदी उपविषय-मीरा बहन और बाघ(कहानी)

दक्षता-लेखन,व्याकरण,वर्तनी अभिभावक के हस्ताक्षर-.....

प्र:1) छह जंगली जानवरों के नाम लिखों-

1) 4)

2) 5)

3) 6)

प्र:2) क) मीरा बहन का जन्म कहाँ हुआ था ?

उत्तर:

ख) भारत देश कब आजाद हुआ ?

उत्तर:

प्र:3) निम्न के तीन-तीन पर्यायवाची लिखों:-

घर

पाठशाला

प्र:4) मिलान करो:-

| | |
|--------|---------|
| शेर | रेंकना |
| गधा | रेंभाना |
| गाय | भाँकना |
| कुत्ता | दहाड़ना |

प्र:5) सुलेख लिखों-

लोग चकित थे - बाघ के अंदर गए बिना पिंजड़ा बंद कैसे हो गया ?

लोग मीरा बहन के पास पहुंचे । लोगों ने सोचा कि गोपाल आश्रम पास में ही था , इसलिए शायद मीरा बहन को मालूम हो कि रात में क्या हुआ। पूछने पर मीरा बहन बोली-देखो भाई , मुझे नींद नहीं आ रही थी ।

.....

.....

.....

.....

.....

.....

.....

Learning work learn all the work done in online classes as well as complete your work in fair notebook

Social studies

Draw the political map in a chart paper given below:-



Learning work learn all the work done in online classes as well as complete your work in fair notebook

Science

Do any one Activity

1. Make a scrap book and paste five samples each of cereals, pulses and oil seeds identify the season of their sowing and harvesting

OR

2. Paste the road signs on a chart paper with the information they import

Learning work learn all the work done in online classes as well as complete your work in fair notebook

English

1. Write and learn 20 lines on myself.
2. Write 10 pages writing in cursive writing.
3. Write 15 difficult words from chapter 1 & 2.

Learning work learn all the work done in online classes as well as complete your work in fair notebook

Computer

Worksheet

Q1. What is computer ?

Q2. Explain what is input device and output device and give their two examples .

Q3. Matching -

Match the parts of a computer

KEYBOARD


MONITOR

MOUSE

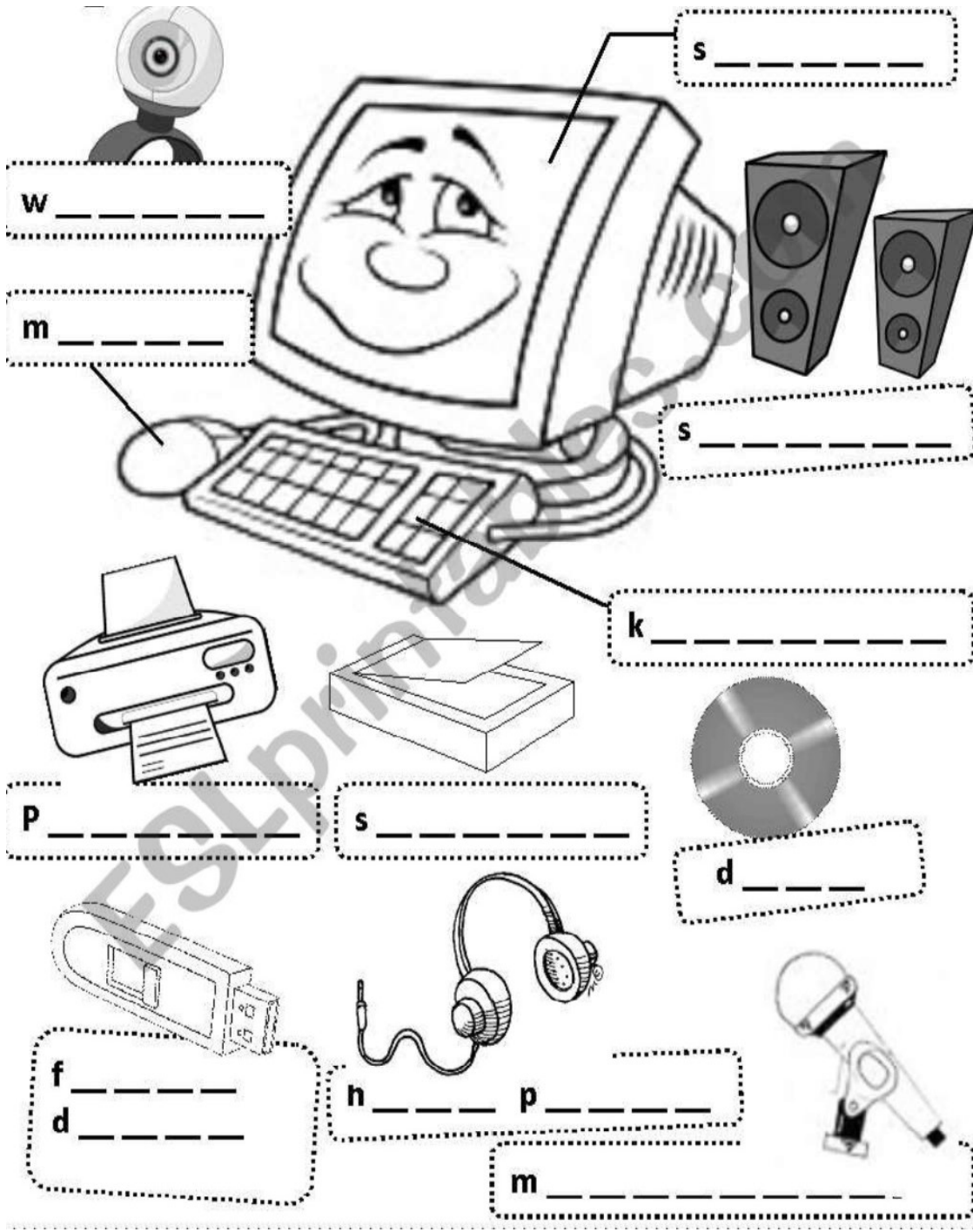
PRINTER

SPEAKER

CPU



Q4. Name the following components.



G.K


Q1. Write the name of any 20 countries which are affected from corona virus.

Q2. Write and learn the capital of all the states.

Learning work learn all the work done in online classes as well as complete your work in fair notebook

Drawing

Draw the bird and colour it.



Important Notice:-

Dear parents and students it's my humble request to you all that take your holidays homework seriously.

Complete your work in neat and clean handwriting and learn all the subject work done during online classes.

Enjoy your summer vacation at home

****Stay home be safe****

Thank you

CLASS TEACHER
GULNAZ MALICK